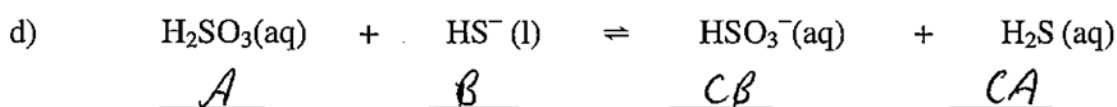
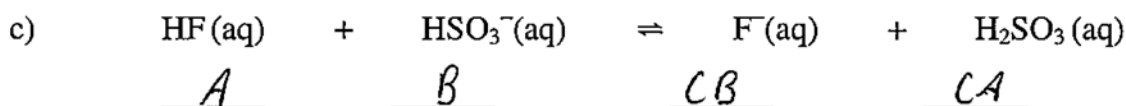
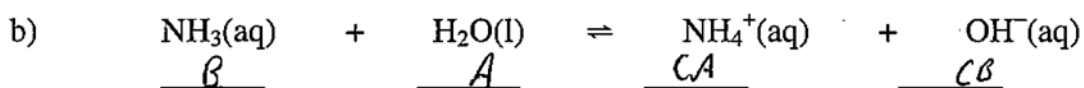
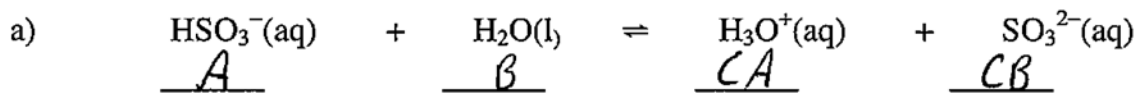


Brønsted-Lowry Acids and Bases

1. Label each reactant in the following equations as Brønsted-Lowry acid or base:



2. For each of the following reactions, label each reactant as Brønsted-Lowry acid or base **and** complete the reaction.

