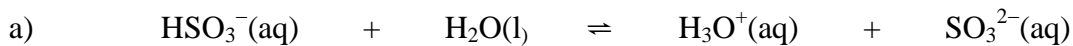


### WS 3 - Brønsted-Lowry Acids and Bases

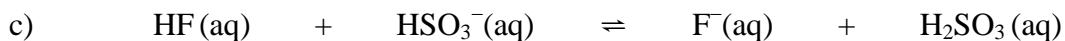
1. Label each reactant in the following equations as Brønsted-Lowry acid or base:



\_\_\_\_\_



\_\_\_\_\_



\_\_\_\_\_



\_\_\_\_\_

2. For each of the following reactions, label each reactant as Brønsted-Lowry acid or base **and** complete the reaction.




\_\_\_\_\_



\_\_\_\_\_



\_\_\_\_\_



\_\_\_\_\_



\_\_\_\_\_

3. For questions 1 and 2, label each product as conjugate acid or conjugate base.