


WS 6 – Organic Reactions

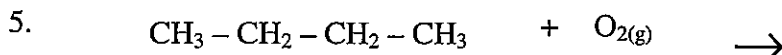
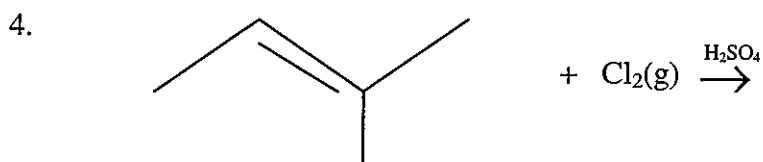
For each of the following reactions:

- Draw the reaction.
- Give the reaction type.
- Name the organic reactant(s) and product(s)

1. Propene reacts with solid iodine.



3. 4,4-dimethylhept-2-ene reacts with oxygen.



6. octanoic acid reacts with ethanol.

7. Benzene reacts with liquid bromine.

