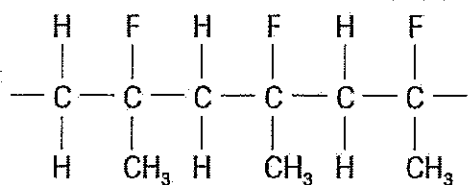
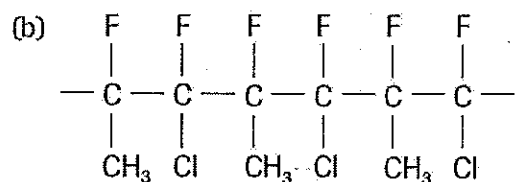
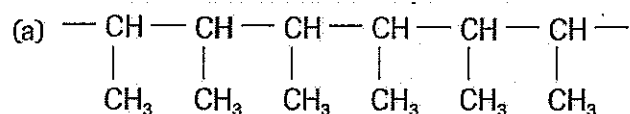


## WS 7 – Polymerization Reactions

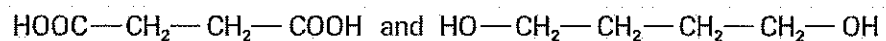
1. Draw a structural formula of the monomer of the following polymer:



2. What monomer could be used to produce each of these polymers?



3. Draw a structural formula equation to show a repeating unit of a condensation polymer formed from the following compounds:



4. What functional groups must be present to form a polyester?